

Example 5: Solving a Trigonometric Equation With a Multiple Angle

a) Solve the equation $\sin 3\theta = \frac{\sqrt{3}}{2}$ for $[0, 2\pi)$. ← Domain



Let $x = 3\theta$

$\sin x = \frac{\sqrt{3}}{2}$ $\sin x$ is +ve in QI & II

In QI: $x = \frac{\pi}{3}$ In QII: $x = \frac{2\pi}{3}$

Replace x by 3θ

$3\theta = \frac{\pi}{3}$

$\theta = \frac{\pi}{9}$

$3\theta = \frac{2\pi}{3}$

$\theta = \frac{2\pi}{9}$

If we need the general solution: $\frac{\pi}{9} + \frac{2\pi k}{3}, k \in \mathbb{Z}$

$P = \frac{2\pi}{b} = \frac{2\pi}{3}$

$\frac{2\pi}{9} + \frac{2\pi k}{3}, k \in \mathbb{Z}$

b) Solve the equation $3 \cos \frac{1}{2}x - \sqrt{2} = 5 \cos \frac{1}{2}x$ for $[0^\circ, 360^\circ)$

Let $\theta = \frac{1}{2}x$

$3 \cos \theta - \sqrt{2} = 5 \cos \theta$

$3 \cos \theta - 5 \cos \theta = \sqrt{2}$

$-2 \cos \theta = \sqrt{2}$

$\cos \theta = \frac{\sqrt{2}}{-2}$

$\cos \theta$ is -ve in QII & QIII

Let's find Ref. angle.

$\cos \theta_R = \frac{\sqrt{2}}{2}$

$\theta_R = 45^\circ$

In QII:

$\theta = 180 - 45$

$\theta = 135^\circ$

$\frac{1}{2}x = 135^\circ$

$x = 270^\circ$

In QIII:

$\theta = 180 + 45$

$\theta = 225^\circ$

$\frac{1}{2}x = 225^\circ$

$x = 450^\circ$ ←

VERIFY: $x = 270^\circ$

LS

RS

$3 \cos \frac{1}{2}(270) - \sqrt{2}$

$3 \cos 135^\circ - \sqrt{2}$

$3 \left(-\frac{\sqrt{2}}{2} \right) - \sqrt{2}$

$-\frac{3\sqrt{2}}{2} - \frac{\sqrt{2}}{2}$

$-\frac{3\sqrt{2}}{2} - \frac{2\sqrt{2}}{2}$

$-\frac{5\sqrt{2}}{2}$

LS

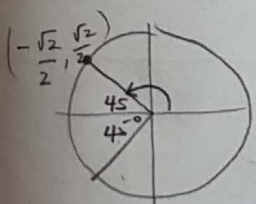
RS ✓

$5 \cos \frac{1}{2}(270)$

$5 \cos 135^\circ$

$5 \left(-\frac{\sqrt{2}}{2} \right)$

$-\frac{5\sqrt{2}}{2}$



What is the general solution?

$P = \frac{2\pi}{b}$

$x = 270^\circ + 720^\circ k, k \in \mathbb{Z}$

$P = \frac{360^\circ}{2}$

$x = 450^\circ + 720^\circ k, k \in \mathbb{Z}$

$P = \frac{720^\circ}{2}$

Not part of the domain

quadratic trig equation.
 Example 6: Solving a Second-Degree Trigonometric Equation

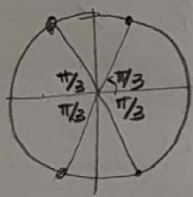
a) Solve the equation $4 \sin^2 x = 3$ for $0 \leq x < 2\pi$, then give the general solution.

$$4 \sin^2 x = 3$$

$$\sin^2 x = \frac{3}{4}$$

$$\sqrt{(\sin x)^2} = \sqrt{\frac{3}{4}}$$

$$\sin x = \pm \frac{\sqrt{3}}{2}$$



$$\sin x = \frac{\sqrt{3}}{2} \text{ In QI \& QII}$$

$$\sin x = -\frac{\sqrt{3}}{2} \text{ In QIII \& QIV}$$

Ref angle = $\pi/3$

b) Solve the equation $2 \cos^2 \theta - \sqrt{3} \cos \theta = 0$ over the interval $[0^\circ, 360^\circ)$

$$2 \cos^2 \theta - \sqrt{3} \cos \theta = 0$$

$$\cos \theta (2 \cos \theta - \sqrt{3}) = 0$$

$$\cos \theta = 0$$

$$\theta = 90^\circ, 270^\circ$$

$$2 \cos \theta - \sqrt{3} = 0$$

$$\cos \theta = \frac{\sqrt{3}}{2}$$

$$\theta = 30^\circ, 330^\circ$$



VERIFY: $\theta = 90^\circ$

LS	RS
$2 \cos^2 90^\circ - \sqrt{3} \cos 90^\circ$	0
$2 (\cos 90^\circ)^2 - \sqrt{3} \cos 90^\circ$	
$2 (0)^2 - \sqrt{3} (0)$	0 ✓

$$2 \cos^2 90^\circ - \sqrt{3} \cos 90^\circ = 0$$

$$2 (\cos 90^\circ)^2 - \sqrt{3} \cos 90^\circ$$

$$2 (0)^2 - \sqrt{3} (0) = 0 \checkmark$$

LS	RS
$2 (\cos 30^\circ)^2 - \sqrt{3} \cos 30^\circ$	0

c) Solve $\sin^2 \theta - \sin \theta = 2$ for $[0, 2\pi)$.

$$(\sin \theta)^2 - \sin \theta = 2$$

$$(\sin \theta)^2 - \sin \theta - 2 = 0$$

Rewrite: let $x = \sin \theta$

$$x^2 - x - 2 = 0$$

$$(x - 2)(x + 1) = 0$$

Put the $\sin \theta$ back

$$(\sin \theta - 2)(\sin \theta + 1) = 0$$

$$\sin \theta - 2 = 0$$

$$\sin \theta = 2$$

$\theta = \text{No solution}$

$$\sin \theta + 1 = 0$$

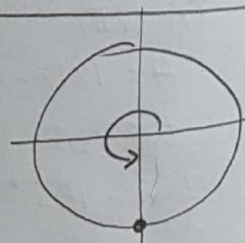
$$\sin \theta = -1$$

$$\theta = \frac{3\pi}{2}$$

VERIFY:

LS	RS
$(\sin \frac{3\pi}{2})^2 - \sin \frac{3\pi}{2}$	2
$(-1)^2 - (-1)$	
$1 + 1$	
2	

LS = RS



Example 7: Solving a Second-Degree Trigonometric Equation Using the Quadratic Formula

Solve the equation $4 \tan^2 x = 2 \tan x + 1$ over the domain $0 \leq x < 2\pi$, then state the general solution.

$$4(\tan x)^2 = 2 \tan x + 1$$

$$4(\tan x)^2 - 2 \tan x - 1 = 0$$

Let $y = \tan x$

$$4y^2 - 2y - 1 = 0$$

$$y = \frac{-b \pm \sqrt{b^2 - 4ac}}{2a}$$

$$y = \frac{-(-2) \pm \sqrt{(-2)^2 - 4(4)(-1)}}{2(4)}$$

$$y = \frac{2 \pm \sqrt{20}}{8}$$

$$y = \frac{2 \pm 2\sqrt{5}}{8}$$

$$y = \frac{2(1 \pm \sqrt{5})}{8}$$

$$y = \frac{1 \pm \sqrt{5}}{4}$$

Replace the $\tan x$ back

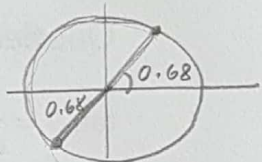
$$\tan x = \frac{1 + \sqrt{5}}{4}$$

In QI & III

$$\tan x = 0.8091$$

$$x = \tan^{-1}(0.8091)$$

$$x = 0.68$$

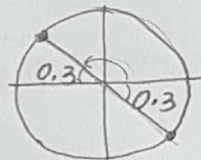


The general solution

$$x = 0.68 + \pi k, k \in \mathbb{Z}$$

period for \tan is π .

$$\tan x = \frac{1 - \sqrt{5}}{4}$$



$$\tan x = -0.3090 \dots$$

$$x = \tan^{-1}(-0.3090)$$

$$x_R = \tan^{-1}(0.3090)$$

$$x = \pi - 0.3 = 2.84$$

The general solution

$$x = 2.84 + \pi k, k \in \mathbb{Z}$$

period for \tan is π .

Assignment Time! Work on p.592- 4-15, MC 1&2

Q 9-14 on
pg. 595.